



# PUNJAB POLICE

Police to its last particle is duty

Exam Name	INTELLIGENCE ASSISTANT IN INTELLIGENCE CADRE OF PUNJAB POLICE AND CONSTABLE IN INVESTIGATION CADRE OF PUNJAB POLICE (PBI)- 2021
Registration Number	
Application No	
Roll No	
Name of Candidate	<a href="http://www.exammix.com">www.exammix.com</a>
Exam Date	10/09/2021
Shift	2:00 PM - 5:00 PM
Subject	Intelligence Assistant In Intelligence Cadre And Constable In Investigation Cadre

Section : Intelligence Assistant In Intelligence Cadre And Constable In Investigation Cadre

Q.1 Cost per bit of storage for primary storage is \_\_\_\_\_.

- Ans
- 1. Medium
  - 2. Negligible
  - 3. Low
  - 4. High

Question ID : 63068046626  
Status : Answered  
Chosen Option : 2

Q.2 The Hriday Drishyam Music Festival is held in the state of:

- ns
- 1. Uttar Pradesh
  - 2. Karnataka
  - 3. Madhya Pradesh
  - 4. Tamil Nadu

Question ID : 63068039210  
Status : nswered  
Chosen Option : 4

**Q.3** Which scheme gives occupation to one individual for each family and berojgaribhatta to the youth of Punjab?

- Ans
- 1. Care Companion Program Health Scheme
  - 2. Apni Gaddi Apna Rozgar Yojana
  - 3. Annapurna Akshya Patra Yojana
  - 4. Har Ghar Ton Ikk Captain Scheme

Question ID : 63068046745  
Status : Answered  
Chosen Option : 4

**Q.4** In which of the following years, did MS Vats begin excavations at Harappa?

- Ans
- 1. 1925
  - 2. 1875
  - 3. 1921
  - 4. 1946

Question ID : 63068020610  
Status : Answered  
Chosen Option : 3

**Q.5** With which of the following Indian states is the Maruni dance associated?

- Ans
- 1. Sikkim
  - 2. Chhattisgarh
  - 3. Goa
  - 4. Telangana

Question ID : 63068039997  
Status : Answered  
Chosen Option : 1

**Q.6** Which country will host AFC Asian Cup 2023?

- Ans
- 1. India
  - 2. France
  - 3. Malaysia
  - 4. China

Question ID : 63068046529  
Status : Answered  
Chosen Option : 1

Q.7 The Zilla Parishad may prepare in \_\_\_\_\_ a supplementary estimate providing for any modification of its budget and may submit it to the Government for approval within such time and in such manner as may be prescribed.

- Ans
- 1. every 6 months
  - 2. every 5 years
  - 3. each year
  - 4. every 3 months

Question ID : 63068046829  
Status : Answered  
Chosen Option : 3

Q.8 Singorgarh Fort which was in news in March 2021, is situated in \_\_\_\_\_.

- Ans
- 1. Madhya Pradesh
  - 2. Gujarat
  - 3. Rajasthan
  - 4. Karnataka

Question ID : 63068046450  
Status : Answered  
Chosen Option : 3

Q.9 'Ultra Swachh' developed by the DRDO is a \_\_\_\_\_.

- I. Diagnostic kit
- II. Disinfection unit

- Ans
- 1. Both I and II
  - 2. Neither I nor II
  - 3. Only II
  - 4. Only I

Question ID : 63068046495  
Status : Answered  
Chosen Option : 3

Q.10 Tetrazolium test is used to determine \_\_\_\_\_.

- Ans
- 1. Seed born disease
  - 2. Viability of seed
  - 3. Germination of seed
  - 4. Dormancy of seed

Question ID : 63068046594  
Status : Answered  
Chosen Option : 4

Q.11 What is the role of intermediate frequency (IF) in receiver?

- Ans
- 1. To restore carrier frequency from lower frequency
  - 2. To change carrier frequency into a lower frequency
  - 3. To change carrier frequency into a radio frequency
  - 4. To change carrier frequency into a higher frequency

Question ID : 63068046574  
Status : Answered  
Chosen Option : 2

Q.12 Which automobile company launched the first ever Virtual Racing Championsip in India in November 2020?

- Ans
- 1. Hyundai
  - 2. Volkswagen
  - 3. Nissan
  - 4. Maruti Suzuki

Question ID : 63068046481  
Status : Answered  
Chosen Option : 2

Q.13 Krishnappa Gowtham became the most expensive uncapped Indian player in IPL history. He was bought by \_\_\_\_\_.

- Ans
- 1. Delhi Capitals
  - 2. Rajasthan Royals
  - 3. Mumbai Indians
  - 4. Chennai Super Kings

Question ID : 63068046466  
Status : Answered  
Chosen Option : 3

Q.14 Which devices you will use to display the image related information to the user?

- Ans
- 1. Monitor
  - 2. Microphone
  - 3. Speaker
  - 4. Input devices

Question ID : 63068046621  
Status : Answered  
Chosen Option : 1

Q.15 The 'black fungus' affecting many Covid patients in India is also known as \_\_\_\_\_.

- I. Mucormycosis
- II. Aspergillus

- Ans
- 1. Only II
  - 2. Neither I nor II
  - 3. Only I
  - 4. Both I and II

Question ID : 63068046492  
Status : Answered  
Chosen Option : 3

Q.16 In September 2020, the first ever trilateral dialogue on enhancing cooperation in the Indo-Pacific region was held among which three countries?

- Ans
- 1. India-Bangladesh -France
  - 2. Germany-Japan-Russia
  - 3. Australia-Russia-China
  - 4. India-Australia-France

Question ID : 63068046534  
Status : Answered  
Chosen Option : 1

Q.17 Under which Article is the President bound to consult the Chief Justice of India in the appointment of other judges of the Supreme Court?

- Ans
- 1. Article 200
  - 2. Article 155
  - 3. Article 122
  - 4. Article 124(2)

Question ID : 63068046095  
Status : Answered  
Chosen Option : 4

Q.18 Which among the following is not a division of Punjab's musical repertoire?

- Ans
- 1. Sufiana Qalam
  - 2. Bihugeet
  - 3. Gurmat Sangeet
  - 4. Qawwali

Question ID : 63068046726  
Status : Answered  
Chosen Option : 4

Q.19 What is the folk dance of males of Malwa region of Punjab?

- Ans  1. MalwaiGiddha  
 2. Jhumar  
 3. Bhangra  
 4. SialKoti

Question ID : 63068046740  
Status : Answered  
Chosen Option : 1

Q.20 What does pneumonia affect?

- Ans  1. Small intestine  
 2. Eyes  
 3. Alveoli in lungs  
 4. Nose

Question ID : 63068046588  
Status : Answered  
Chosen Option : 3

Q.21 Which of the following sportsperson was present during the launch of 'Fit Hai To Hit Hai India' programme in July 2020?

- I. P.V. Sindhu  
II. Sunil Chhetri  
III. Rishabh Pant

- Ans  1. I and III  
 2. I and II  
 3. Only III  
 4. Only II

Question ID : 63068046488  
Status : Answered  
Chosen Option : 1

Q.22 The Köhler Theory is based on:

- Ans  1. classical mechanics  
 2. electromagnetism  
 3. equilibrium thermodynamics  
 4. optics and acoustics

Question ID : 63068043437  
Status : Answered  
Chosen Option : 1

Q.23 The word 'Sovereign' in the preamble of the Indian Constitution has been taken from the:

- Ans
- 1. Government of India Act, 1935
  - 2. Objectives Resolution
  - 3. Indian Councils Act, 1882
  - 4. Charter Act of 1883

Question ID : 63068039981  
Status : Answered  
Chosen Option : 2

Q.24 After passed by both the Houses of the Parliament and ratified by the State Legislatures, to whom is the Bill presented for assent?

- Ans
- 1. President
  - 2. Vice President
  - 3. Speaker
  - 4. Prime Minister

Question ID : 63068044081  
Status : Answered  
Chosen Option : 1

Q.25 In each \_\_\_\_\_, the Subordinate Courts are of three types: Civil Court, Criminal Court and Revenue Court.

- Ans
- 1. district
  - 2. block
  - 3. city
  - 4. village

Question ID : 63068046838  
Status : Answered  
Chosen Option : 1

Q.26 \_\_\_\_\_ of the Constitution deals with the legislative relations between the Union and the States

- Ans
- 1. Articles 22A-244A
  - 2. Articles 245-255
  - 3. Articles 256-257
  - 4. Articles 243P-243ZG

Question ID : 63068046800  
Status : Answered  
Chosen Option : 2

Q.27 Each Standing Committee shall consist of such a number of members not exceeding \_\_\_ including the Chairman elected by the members of Zilla Parishad from among the elected members.

- Ans  1. 5  
 2. 6  
 3. 3  
 4. 2

Question ID : 63068046826  
Status : Answered  
Chosen Option : 1

Q.28 When did the last Punjab Legislative Assembly before independence, held its last sitting?

- Ans  1. July 4, 1947  
 2. August 4, 1946  
 3. August 4, 1947  
 4. July 4, 1946

Question ID : 63068046687  
Status : Answered  
Chosen Option : 4

Q.29 Which of the following symbols represents "not equal to" in Pseudocode?

- Ans  1. ~!  
 2. !=  
 3. ==  
 4. =/

Question ID : 63068043423  
Status : Answered  
Chosen Option : 3

Q.30 All animals are members of the Kingdom Animalia are also called as \_\_\_\_\_.

- Ans  1. Metazoa  
 2. Protista  
 3. Monera  
 4. Bryophyta

Question ID : 63068046639  
Status : Answered  
Chosen Option : 3



Q.31 \_\_\_\_\_ has the power to abolish the Legislative Council of a State.

- Ans
- 1. State Assembly
  - 2. Rajya Sabha
  - 3. Parliament
  - 4. Lok Sabha

Question ID : 63068046796  
Status : Answered  
Chosen Option : 1

Q.32 Which of the following statements is correct regarding DRDO's 'Sindhu Netra'?

- I. It is a surveillance satellite.  
II. It was launched by the Indian Space Research Organisation.

- Ans
- 1. Only II
  - 2. Neither I nor II
  - 3. Only I
  - 4. Both I and II

Question ID : 63068046499  
Status : Answered  
Chosen Option : 2

Q.33 Article 61 of the Indian Constitution is concerned with which of the following functions?

- Ans
- 1. Oath by the President
  - 2. Filling of vacancy to the office of President
  - 3. Impeachment of the President
  - 4. Election of the President of India

Question ID : 63068026519  
Status : Answered  
Chosen Option : 3

Q.34 What is the Doab area between Ravi and Chenab called?

- Ans
- 1. Chaj Doab
  - 2. Rechna Doab
  - 3. Doab Bist Jalandhar
  - 4. Bari Doab

Question ID : 63068046759  
Status : Answered  
Chosen Option : 2

Q.35 According to the population census of 2011, what is the percentage of Christian population in India?

- Ans
- 1. 2.3%
  - 2. 5.2%
  - 3. 3.8%
  - 4. 4%

Question ID : 63068039026  
Status : Answered  
Chosen Option : 1

Q.36 There is a vast body of laws known as \_\_\_\_ in the form of rules, regulations as well as by laws made by the Centre and State Government and local authorities like the Municipal Corporation, Gram Panchayat and other bodies.

- Ans
- 1. Subordinate Legislation
  - 2. Presidential Legislation
  - 3. State Legislation
  - 4. Supreme Legislation

Question ID : 63068046103  
Status : Answered  
Chosen Option : 2

Q.37 Bituminous coal is used for \_\_\_\_\_.

- Ans
- 1. Metallurgical furnace
  - 2. Power generation
  - 3. Boiler heating
  - 4. Gaseous fuel

Question ID : 63068046642  
Status : Answered  
Chosen Option : 2

Q.38 The world's first yoga university outside India has been launched in \_\_\_\_\_.

- Ans
- 1. China
  - 2. Russia
  - 3. the UK
  - 4. the US

Question ID : 63068046561  
Status : Answered  
Chosen Option : 4

Q.39 Which type of architecture is mostly used in workstations?

- Ans
- 1. CISC
  - 2. SISC
  - 3. RICS
  - 4. RISC

Question ID : 63068046618  
Status : Answered  
Chosen Option : 4

Q.40 When was the Garib Kalyan Rojgar Abhiyaan launched?

- Ans
- 1. 20 June 2020
  - 2. 13 July 2020
  - 3. 1 August 2019
  - 4. 5 May 2015

Question ID : 63068021195  
Status : Answered  
Chosen Option : 1

Q.41 Mohan borrowed some money at a simple interest at a rate of 12 % per annum. He had to pay ₹1680 as interest after 2 years 4 months. What sum did he borrow?

- Ans
- 1. ₹6,000
  - 2. ₹600
  - 3. ₹2,000
  - 4. ₹4,000

Question ID : 63068041383  
Status : Answered  
Chosen Option : 1

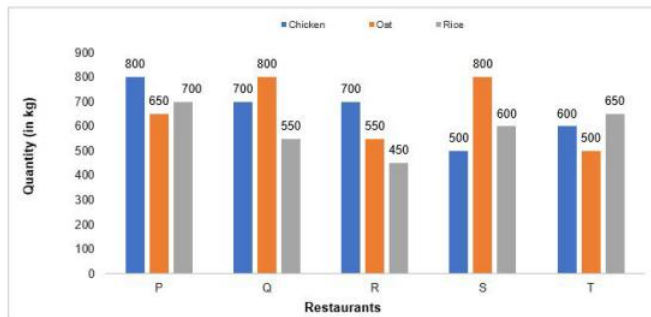
Q.42 The sum of two numbers is 70. Their HCF is 5 and LCM is 225. What is the sum of the reciprocals of these numbers?

- Ans
- 1.  $\frac{14}{25}$
  - 2.  $\frac{1}{225}$
  - 3.  $\frac{7}{15}$
  - 4.  $\frac{14}{225}$

Question ID : 63068031448  
Status : Answered  
Chosen Option : 4

**Q.43** The bar graph given below shows the quantities (in kg) of Chicken, Oat and Rice consumed by various restaurants over a year.

Rice consumed by restaurant Q is approximately what percent of the Rice consumed by all the restaurants together?



- Ans
- 1. 21%
  - 2. 19%
  - 3. 12%
  - 4. 14%

Question ID : 63068047637

Status : Answered

Chosen Option : 2

**Q.44** The number 617856 is NOT divisible by \_\_\_\_\_.

- Ans
- 1. 2
  - 2. 11
  - 3. 3
  - 4. 4

Question ID : 63068040391

Status : Answered

Chosen Option : 2

**Q.45** Which of the following has the least value?

- Ans
- 1.  $\frac{34}{35}$
  - 2.  $\frac{17}{18}$
  - 3.  $\frac{13}{14}$
  - 4.  $\frac{23}{25}$

Question ID : 63068042468

Status : Answered

Chosen Option : 4

Q.46 A can do a work in 21 days while B can do it in 35 days. In how many days approximately will they finish it together?

- Ans
- 1. 17 days
  - 2. 13 days
  - 3. 18 days
  - 4. 19 days

Question ID : 63068046952  
 Status : Answered  
 Chosen Option : 2

Q.47  $8.5 - \left[ 3.25 + \left\{ 1\frac{1}{4} - \frac{1}{2} \left( 1\frac{1}{2} - \frac{1}{3} - \frac{1}{6} \right) \right\} \right] = ?$

- Ans
- 1. 4.5
  - 2.  $4\frac{1}{6}$
  - 3.  $\frac{2}{9}$
  - 4. 9.5

Question ID : 63068040925  
 Status : Answered  
 Chosen Option : 1

Q.48 The average age of the students in a class was 15 years. When a new student joined the class, the average increased by 0.5 years. Find the total number of students in the class after the new student joined, if the age of the new student is 20 years.

- Ans
- 1. 10
  - 2. 9
  - 3. 12
  - 4. 13

Question ID : 63068046975  
 Status : Answered  
 Chosen Option : 1

Q.49 A person invested a total of Rs. 2500, one part at 2%, a second part at 4% and the remaining sum at 8% per annum simple interest. At the end of the year, he got the same interest in all the three cases. The money invested at 2% is approximately \_\_\_\_\_.

- Ans
- 1. Rs. 1725
  - 2. Rs. 1525
  - 3. Rs. 1325
  - 4. Rs. 1429

Question ID : 63068046939  
 Status : Answered  
 Chosen Option : 4

Q.50 A cylindrical roller has radius and length equal to 28 cm and 200 cm respectively. If the roller rolls 800 times to cover a field, then the area of the field is \_\_\_\_\_  $m^2$ .

- Ans
- 1. 6132
  - 2. 7040
  - 3. 3000
  - 4. 2816

Question ID : 63068031368  
Status : Answered  
Chosen Option : 4

Q.51 The average weight of 6 people increases by 3.5 kg when a new person replaces one of them weighing 75 kg. What was the weight of the new person?

- Ans
- 1. 77 kg
  - 2. 89 kg
  - 3. 96 kg
  - 4. 85 kg

Question ID : 63068046981  
Status : Answered  
Chosen Option : 3

Q.52 A work which could be finished in 12 days by a certain number of men was finished 2 days earlier as 15 more men joined just before work was started. The number of men initially employed was \_\_\_\_\_.

- Ans
- 1. 75
  - 2. 60
  - 3. 90
  - 4. 150

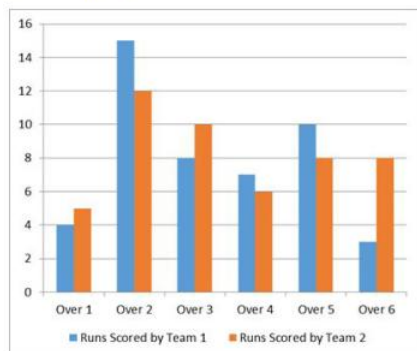
Question ID : 63068046951  
Status : Answered  
Chosen Option : 1

Q.53 A can do a piece of work in 22 days, B in 11 days and C in 16 days. In approximately how many days can A finish the work if he is assisted by B on one day and C on the next, alternately? [Give your answer correct to the nearest integer.]

- Ans
- 1. 13 days
  - 2. 7 days
  - 3. 11 days
  - 4. 8 days

Question ID : 63068046961  
Status : Answered  
Chosen Option : 4

**Q.54** The double bar graph given here compares the number of runs scored by each of the two teams in each of their first six overs of a match.



If we do an over-by-over comparison, how many times, at the completion of an over, was Team 1 ahead of Team 2 in terms of the total runs scored till the end of that over?

- Ans**
- 1. 3 times
  - 2. 2 times
  - 3. 4 times
  - 4. 5 times

Question ID : 63068040349  
 Status : Answered  
 Chosen Option : 1

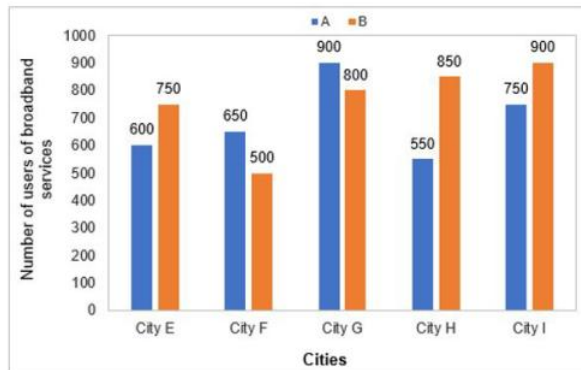
**Q.55** If  $x$  = average of first five odd prime numbers then find the value of the expression  $2x$ .

- Ans**
- 1. 5.5
  - 2. 15.6
  - 3. 4.5
  - 4. 7.8

Question ID : 63068041115  
 Status : Answered  
 Chosen Option : 2

**Q.56** The graph given below represents the number of users of two broadband services A and B across 5 cities E, F, G, H and I.

What is the difference between the total number of users of broadband A and B together in city G and the total number of users of broadband A and B together in city E?



- Ans
- 1. 320
  - 2. 310
  - 3. 340
  - 4. 350

Question ID : 63068047639

Status : Answered

Chosen Option : 4

**Q.57** Two trains start at the same time from station A and station B. They proceed towards each other at the speeds of 60 km/h and 71 km/h, respectively. When they meet, it is found that one train has travelled 77 km more than the other. The distance between the two stations is:

- Ans
- 1. 896 km
  - 2. 900 km
  - 3. 1000 km
  - 4. 917 km

Question ID : 63068031301

Status : Answered

Chosen Option : 4

**Q.58** With an average speed of 60 km/h, a train reaches its destination in time. If it runs with an average speed of 55 km/h, it is late by half hour. The total distance of the journey is:

- Ans
- 1. 330 km
  - 2. 330 m
  - 3. 110 m
  - 4. 110 km

Question ID : 63068031266

Status : Answered

Chosen Option : 1



**Q.59** The walls of a cuboidal room are to be white washed. There are 2 windows each of dimensions  $20 \text{ cm} \times 40 \text{ cm}$  and a door of dimensions  $80 \text{ cm} \times 150 \text{ cm}$  in the room. Find the cost of white wash if the rate is Rs. 50 per  $\text{m}^2$ . The dimensions of the floor are  $4 \text{ m} \times 8 \text{ m}$ , and the ceiling is 10 m high.

- Ans
- 1. Rs. 6,332
  - 2. Rs. 12,000
  - 3. Rs. 238.64
  - 4. Rs. 11,932

Question ID : 63068031468  
 Status : Answered  
 Chosen Option : 4

**Q.60** Six circles each of radius 'R' are present with their centres at the vertices of an irregular hexagon — one circle at each vertex. Calculate the sum of the area of the portion of these circles that falls inside the hexagon.

- Ans
- 1.  $2\pi R^2$
  - 2.  $\pi R^2$
  - 3.  $6\pi R^2$
  - 4.  $4\pi R^2$

Question ID : 63068031465  
 Status : Answered  
 Chosen Option : 1

**Q.61** How many numbers among the following are divisible by 132?

{132, 264, 1152, 660, 566, 924, 1356, 528}

- Ans
- 1. 3
  - 2. 4
  - 3. 8
  - 4. 5

Question ID : 63068026888  
 Status : Answered  
 Chosen Option : 4

**Q.62**  $1500 \div \left[ \frac{1}{4} \text{ of } (58 + 54) - 15 \frac{1}{2} \right] = ?$  is equal to:

- Ans
- 1. 120
  - 2. 55
  - 3. 15
  - 4. 150

Question ID : 63068040735  
 Status : Answered  
 Chosen Option : 1

Q.63 If  $(a - b) = 3$  and  $(a^2 + b^2) = 25$ , then the value of  $(ab)$  is \_\_\_\_\_.

- Ans  1. 8  
 2. 12.0  
 3. 6  
 4. 13.0

Question ID : 63068042513  
Status : Answered  
Chosen Option : 1

Q.64 What is the number whose 12% is 50% of 70?

- Ans  1. 875/3  
 2. 12/11  
 3. 143/71  
 4. 208

Question ID : 63068046896  
Status : Answered  
Chosen Option : 1

Q.65 A sum of ₹1,600 amounts to ₹1,984 in 48 months at a rate of simple interest. What is the rate of interest per annum?

- Ans  1. 3%  
 2. 4%  
 3. 5%  
 4. 6%

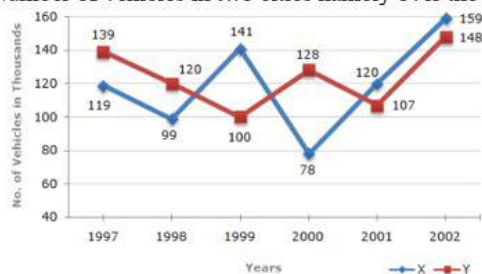
Question ID : 63068041178  
Status : Answered  
Chosen Option : 4

Q.66 A can do a piece of work in 60 days. He works at it alone for 15 days and then B alone finishes the remaining work in 30 days. In how much time will A and B working together, finish the work?

- Ans  1. 19 days  
 2. 22 days  
 3. 20 days  
 4. 24 days

Question ID : 63068040810  
Status : Answered  
Chosen Option : 4

**Q.67** Study the following line graph and answer the given questions.  
 Number of vehicles in two cities namely over the years (Number in Thousands)



In which of the following years, the difference between the cars of cities X and Y was the maximum among the given years?

- Ans
- 1. 2002
  - 2. 1999
  - 3. 2000
  - 4. 1998

Question ID : 63068040911  
 Status : Answered  
 Chosen Option : 3

**Q.68** How many prime numbers are there between 1 and 100?

- Ans
- 1. 26
  - 2. 24
  - 3. 23
  - 4. 25

Question ID : 63068042521  
 Status : Answered  
 Chosen Option : 4

**Q.69** What is the value of  $\frac{2}{5}$  of 40% of  $\sqrt{25600}$ ?

- Ans
- 1. 2.56
  - 2. 26.5
  - 3. 56.2
  - 4. 25.6

Question ID : 63068031414  
 Status : Answered  
 Chosen Option : 4

Q.70 Simplify:  $1740 - 256 + 35 \times 21 - 470 \times 4$

- Ans
- 1. 293
  - 2. 321
  - 3. 289
  - 4. 339

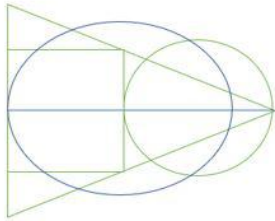
Question ID : 63068046877  
 Status : Answered  
 Chosen Option : 4

Q.71 Seetha starting from her house, goes 7 km towards the East. Then she turns to her left and goes 5 km. Finally, she turns to her left again and goes 7 km. Now, how far is she from her house and in what direction?

- Ans
- 1. 5.5 km, South
  - 2. 7 km, East
  - 3. 5 km, North
  - 4. 4 km, South

Question ID : 63068038607  
 Status : Answered  
 Chosen Option : 3

Q.72 In the given diagram, the triangle represents 'PhDs', the rectangle represents 'policymakers', the ellipse represents 'politicians', and the circle represents 'sales persons'. Answer the following question based on the given diagram.



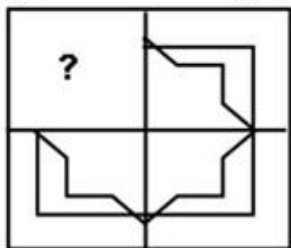
Based on the given diagram, which of the following statements is/are correct?

- A: Some persons who are neither sales persons nor policymakers are PhDs
- B: Some persons who are either sales persons or policymakers are politicians, though non-PhDs
- C: Some persons who are either sales persons or policymakers are politicians and are also PhDs

- Ans
- 1. Only statement A is correct
  - 2. Only statement C is correct
  - 3. All of the given statements are correct
  - 4. Only statement B is correct

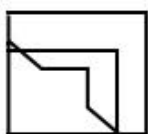
Question ID : 63068041514  
 Status : Answered  
 Chosen Option : 2

Q.73 In each of the following questions, select a figure from amongst the four alternatives, which when placed in the question mark of figure would complete the pattern.

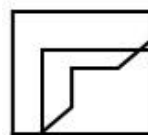


Ans

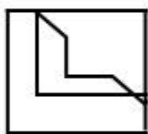
✗ 1.



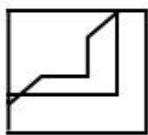
✓ 2.



✗ 3.



✗ 4.



Question ID : 63068045168

Status : Answered

Chosen Option : 2

Q.74 Find the missing letters in the pattern:

\_ kl \_ kk \_ jkl

Ans ✗ 1. jkjk

✗ 2. kjkl

✓ 3. jjlj

✗ 4. jjll

Question ID : 63068044900

Status : Answered

Chosen Option : 3

Q.75 According to following pattern, write the Next number :

2, 8, 512, ..... ?

- Ans
- 1. 193,385,528
  - 2. 154,580,126
  - 3. 134,217,728
  - 4. 138,525,236

Question ID : 63068038357

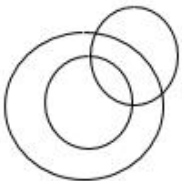
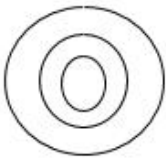
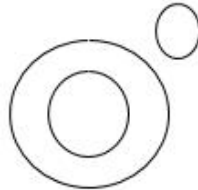

Status : Answered

Chosen Option : 2

Q.76 Select the Venn diagram that best illustrates the following three classes.

Universe, Earth, Toy

Ans

- 1. 
- 2. 
- 3. 
- 4. 

Question ID : 63068038613

Status : Answered

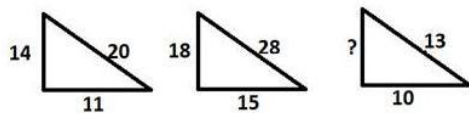
Chosen Option : 3

**Q.77** Seven packets - P1 to P7 - have different weights. P6 has as many packets heavier than it as lighter than it. P3 has more packets lighter than it than heavier, but it is not the heaviest packets. If P1 and P2 are adjacent to each other when ranked according to weight, with neither being the heaviest nor the lightest; which of the following cannot be the heaviest packets?

- Ans  1. P3  
 2. P5  
 3. P7  
 4. P4

Question ID : 63068045128  
 Status : Answered  
 Chosen Option : 1

**Q.78** Study the given pattern carefully and select the number that can replace the question mark (?) in it.



- Ans  1. 18  
 2. 8  
 3. 10  
 4. 22

Question ID : 63068021418  
 Status : Answered  
 Chosen Option : 2

**Q.79** In a certain code language, if 23456 is coded as 45678, then how will 62415 be coded as in that language?

- Ans  1. 63715  
 2. 73125  
 3. 83126  
 4. 84637

Question ID : 63068038468  
 Status : Answered  
 Chosen Option : 4

**Q.80** Seven kids -V, I, B, G, Y, O and R- are standing in a row during a sports meets. Y is to the immediate left of I. V is to the left of B but not between B and I. Exactly four kids are standing between B and I. If V and G have two kids between them, how many kids do O and R have between them?

- Ans  1. 1  
 2. 3  
 3. 0  
 4. 2

Question ID : 63068045107  
 Status : Answered  
 Chosen Option : 3

Q.81 In a certain code language, 'TUB' is written as '129'. How will 'TAN' be written in that code language?

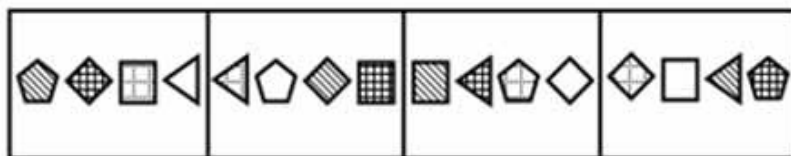
- Ans
- 1. 103
  - 2. 101
  - 3. 113
  - 4. 105

Question ID : 63068047085

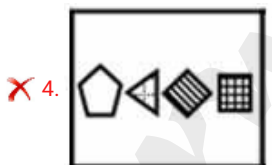
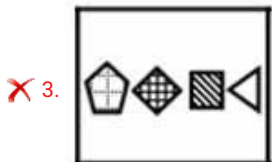
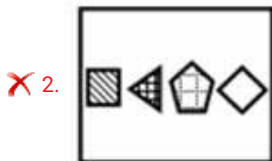
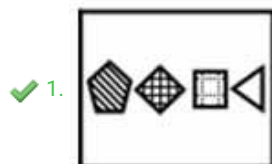
Status : Answered

Chosen Option : 4

Q.82 Each of the following questions, contain four problem figures and four answer figures marked a, b, c, and d. Select a figure from amongst the answer figures which will continue the same series as given in the problem figures.



Ans



Question ID : 63068045147


Status : Answered

Chosen Option : 1



**Q.83** Select the answer figure that is related to figure C in the same way as figure B is related to figure A.

Problem Fig.



Answer Fig.



- Ans  1. 1  
 2. 2  
 3. 3  
 4. 4

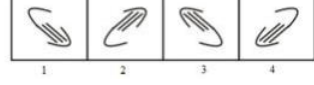
Question ID : 63068038012  
 Status : Answered  
 Chosen Option : 1

**Q.84** Select the answer figure that is related to figure C in the same way as figure B is related to figure A.

Problem Fig.



Answer Fig.



- Ans  1. 3  
 2. 1  
 3. 4  
 4. 2

Question ID : 63068038016  
 Status : Answered  
 Chosen Option : 1

**Q.85** Select the option in which the words share the same relationship as that shared by the given pair of words.

Teacher : School

- Ans  1. Farmer : Tractor  
 2. Cobbler : Shoes  
 3. Doctor : Patient  
 4. Lawyer : Court

Question ID : 63068037914  
 Status : Answered  
 Chosen Option : 4

Q.86 Which of the following numbers will replace the question mark (?) to complete the following number series?  
4, 24, 144, ?, 5184

- Ans
- 1. 720
  - 2. 864
  - 3. 288
  - 4. 1008

Question ID : 63068038136  
Status : Answered  
Chosen Option : 2

Q.87 Which one set of letters when sequentially placed at the gaps in the given letter series shall complete it?

\_ y x w v z y x \_ v z \_ x w v z y \_ w v z y x w \_

- Ans
- 1. zwxvy
  - 2. zwyxv
  - 3. xyvzw
  - 4. wzvxy

Question ID : 63068047028  
Status : Answered  
Chosen Option : 2

Q.88 Which of the following options will replace the question mark (?) in the following letter cluster series?

EV, JQ, OL, TG, ?

- Ans
- 1. UB
  - 2. UA
  - 3. YB
  - 4. YA

Question ID : 63068046026  
Status : Answered  
Chosen Option : 3


Q.89 Pintu is towards the east of Abhishek and is 30 m to the north of Abhilash who is 30 m to the east of Raju. Prashant is exactly between Abhishek and Raju, who is the south of Abhishek.

What is the distance between Pintu and Abhishek?


- Ans
- 1. 30 m
  - 2. 40 m
  - 3. 60 m
  - 4. 50 m

Question ID : 63068044985  
Status : Answered  
Chosen Option : 1

Q.90 Each of the following questions, contain four problem figures and four answer figures. Select a figure from amongst the answer figures which will continue the same series as given in the problem figures.



Ans



Question ID : 63068045153

Status : Answered

Chosen Option : 3

Q.91 ? : 3125 :: 7776 : ?

Ans ✗ 1. (243, 32)

✓ 2. (1024, 16807)

✗ 3. (1024, 243)

✗ 4. (243, 1024)

Question ID : 63068037799

Status : Answered

Chosen Option : 2

**Q.92** In a row of 42 persons, Vipul is 25th from the left side of the row and Varun is 22th from the right side of the row. Find out the number of persons sitting between them.

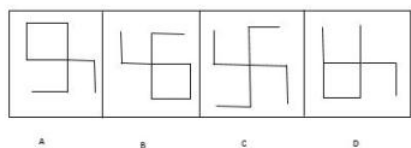
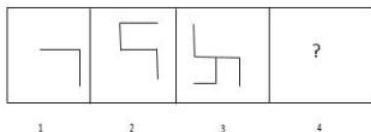
- Ans  1. 3  
 2. 2  
 3. 4  
 4. 5

Question ID : 63068047113

Status : Answered

Chosen Option : 1

**Q.93** Select an appropriate figure from the answer figures (A, B, C, D) to replace the question mark (?) in the given series.



- Ans  1. C  
 2. A  
 3. B  
 4. D

Question ID : 63068038958

Status : Answered

Chosen Option : 1

**Q.94** Select the number that is related to the third number in the same way as the second number is related to the first number.  
 2589 : 1127 :: 3546 : ?

- Ans  1. 2084  
 2. 1084  
 3. 2547  
 4. 1345

Question ID : 63068038150

Status : Answered

Chosen Option : 1

Q.95 Find the missing term in the given series:

JD, MI, PN, SS, \_\_

- Ans
- 1. WY
  - 2. TT
  - 3. WX
  - 4. VX

Question ID : 63068047044

Status : Answered

Chosen Option : 4

Q.96 Three of the following letter clusters are alike in a certain way and one is different. Select the odd one.

- Ans
- 1. PK
  - 2. SG
  - 3. JQ
  - 4. DW

Question ID : 63068026100

Status : Answered

Chosen Option : 2

Q.97 Three statements are given followed by two conclusions numbered I and II. Assuming that the information given in the statements is true, even if it appears to be at variance with commonly known facts, decide which of the conclusions logically follow(s) from the statements.

Statements:

1. Some blues are pinks.
2. All reds are blues.
3. Some pinks are yellows.

Conclusions:

- I. Some yellows are reds.
- II. All pinks are reds.

- Ans
- 1. Only conclusion I follows.
  - 2. Both conclusions I and II follow.
  - 3. Only conclusion II follows.
  - 4. Neither conclusion I nor II follows.

Question ID : 63068038289

Status : Answered

Chosen Option : 4

Q.98 Study the following arrangement carefully and answer the question given below:

'A \$ B' means "A is brother of B".

'A % B' means "A is father of B".

'A @ B' means "A is mother of B".

'A & B' means "A is sister of B".

How is A related to E in expression "A \$ S & T % E & R"?

Ans  1. Father's brother

2. Father's sister

3. Sister

4. Brother

Question ID : 63068047067

Status : Answered

Chosen Option : 1

Q.99 Four number-pairs have been given, out of which three are alike in some manner and one is different. Select the number-pair that is different.

Ans  1. 19 - 28

2. 24 - 11

3. 12 - 23

4. 18 - 17

Question ID : 63068037747

Status : Answered

Chosen Option : 1

Q.100 Select the option that is related to the third word in the same way as the second word is related to the first word.

TAILOR : SEWING :: CHEF : ?

Ans  1. TESTING

2. MANAGING

3. FOOD

4. COOKING

Question ID : 63068026112

Status : Answered

Chosen Option : 4

Q.101 Four parts of a sentence have been given as A, B, C and D. Select the option that shows their correct sequence in order to form a meaningful sentence.

A. his office in time

B. by heavy traffic

C. having been delayed

D. he could not reach

Ans  1. CBDA

2. BDCA

3. CDAB

4. DABC

Question ID : 63068025948

Status : Answered

Chosen Option : 1

Q.102 Choose the best option that gives the correct spelling of the underlined word.  
When the research assistant published an article about his invention, he was awarded an insentive of 50,000 Rs by the government.

- Ans
- 1. Insensitive
  - 2. Insintive
  - 3. Incentive
  - 4. Inscentive

Question ID : 63068036072  
Status : Answered  
Chosen Option : 3

Q.103 Identify the segment in the sentence which contains a grammatical error.

I don't / think / we has / met before.

- Ans
- 1. met before.
  - 2. I don't
  - 3. think
  - 4. we has

Question ID : 63068025766  
Status : Answered  
Chosen Option : 4

Q.104 Read the following message from the IT Team of Rock Foundation Group of Companies and identify the meaning of the word given in inverted commas from the options given below.

Dear All,  
It has come to our notice that several of our employees have been receiving "spurious" mails from unknown people trying to tarnish the image of our esteemed organisation. In this connection, all are requested to be careful not to open any mail from suspicious accounts and bring it to the notice of our Support Team immediately.  
Help us to help you.  
IT Team

- Ans
- 1. Lengthy
  - 2. False
  - 3. Dangerous
  - 4. Abusive

Question ID : 63068035060  
Status : Answered  
Chosen Option : 2

Q.105 'ਅਸੀਂ ਖੇਡਣ ਨਹੀਂ ਜਾਂਦੇ ਹਾਂ' ਵਾਕ ਦਾ ਸਹੀ ਅੰਗਰੇਜ਼ੀ ਅਨੁਵਾਦ ਹੈ:-

- Ans
- 1. We did not go to play.
  - 2. We do not go to play.
  - 3. We does not go to play.
  - 4. We do not goes to play.

Question ID : 63068045510  
Status : Answered  
Chosen Option : 2

**Comprehension:**

With the transport industry in total shambles due to the COVID -19 lockdowns, tourism destinations and other players in the industry have come up with the novel idea of offering virtual tours of popular destinations . This is being done not just to provide relief to the people staying put at their homes, but also to continue to promote themselves amongst their target customers.

These virtual tours also allow destinations and attractions to keep themselves engaged with their customers even during the lockdown. Hence, many have designed, a 360° virtual tour to allow the potential tourists to get a foretaste of the real experience.

One of the top tourist attractions of the world, the New York City has rounded up online resources from museums, galleries, comedy clubs, theaters, and other venues so that the audience can experience the best of the Big Apple virtually, while maintaining social distancing.

The city's famous Broadway has recalibrated its famous productions and is streaming them through social media for public viewing. While the Amazing Max is on hiatus from Off-Broadway performances, he himself will offer online magic lessons for the kids.

Many public libraries have opened their collections for public access. On Spyscape's website, one can learn what kind of spy he or she can be, solve all kinds of puzzling cases and register to tour the James Bond exhibition, that would be made available online.

The capital of the United States, Washington DC, has a plethora of museums, including 17 from the Smithsonian family, where one can enjoy a voyage to space, see live animals or discover famous women in history from a whole new perspective.

The Air and Space Museum takes visitors to the sky, showcasing the amazing technological achievements in aviation and space exploration through the last century. The National Museum of Women in the Arts situated in DC is the only museum in the world solely dedicated to celebrating the diverse artistic achievements of women. During Women's History Month, they tried to engage audience with a contest.

**SubQuestion No : 106**

**Q.106 The passage aims to highlight:**

- Ans
- 1. reasons for the collapse of tourism.
  - 2. alternatives to sustain public interest in tourism
  - 3. change in the general interests of people during the pandemic
  - 4. impact of Covid on the global economy.

Question ID : 63068035683

Status : Answered

Chosen Option : 2



**Comprehension:**

With the transport industry in total shambles due to the COVID -19 lockdowns, tourism destinations and other players in the industry have come up with the novel idea of offering virtual tours of popular destinations . This is being done not just to provide relief to the people staying put at their homes, but also to continue to promote themselves amongst their target customers.

These virtual tours also allow destinations and attractions to keep themselves engaged with their customers even during the lockdown. Hence, many have designed, a 360° virtual tour to allow the potential tourists to get a foretaste of the real experience.

One of the top tourist attractions of the world, the New York City has rounded up online resources from museums, galleries, comedy clubs, theaters, and other venues so that the audience can experience the best of the Big Apple virtually, while maintaining social distancing.

The city's famous Broadway has recalibrated its famous productions and is streaming them through social media for public viewing. While the Amazing Max is on hiatus from Off-Broadway performances, he himself will offer online magic lessons for the kids.

Many public libraries have opened their collections for public access. On Spyscape's website, one can learn what kind of spy he or she can be, solve all kinds of puzzling cases and register to tour the James Bond exhibition, that would be made available online.

The capital of the United States, Washington DC, has a plethora of museums, including 17 from the Smithsonian family, where one can enjoy a voyage to space, see live animals or discover famous women in history from a whole new perspective.

The Air and Space Museum takes visitors to the sky, showcasing the amazing technological achievements in aviation and space exploration through the last century. The National Museum of Women in the Arts situated in DC is the only museum in the world solely dedicated to celebrating the diverse artistic achievements of women. During Women's History Month, they tried to engage audience with a contest.

**SubQuestion No : 107**

**Q.107 A 360 degree virtual tour is one which gives a viewer:**

- Ans**
- 1. an idea of the geographical location of a museum.
  - 2. a complete description of collection that a museum holds.
  - 3. a simulator training experience using the internet.
  - 4. a complete sight- seeing experience using videos and still images.

Question ID : 63068035684

Status : Answered

Chosen Option : 4

**Comprehension:**

With the transport industry in total shambles due to the COVID -19 lockdowns, tourism destinations and other players in the industry have come up with the novel idea of offering virtual tours of popular destinations . This is being done not just to provide relief to the people staying put at their homes, but also to continue to promote themselves amongst their target customers.

These virtual tours also allow destinations and attractions to keep themselves engaged with their customers even during the lockdown. Hence, many have designed, a 360° virtual tour to allow the potential tourists to get a foretaste of the real experience.

One of the top tourist attractions of the world, the New York City has rounded up online resources from museums, galleries, comedy clubs, theaters, and other venues so that the audience can experience the best of the Big Apple virtually, while maintaining social distancing.

The city's famous Broadway has recalibrated its famous productions and is streaming them through social media for public viewing. While the Amazing Max is on hiatus from Off-Broadway performances, he himself will offer online magic lessons for the kids.

Many public libraries have opened their collections for public access. On Spyscape's website, one can learn what kind of spy he or she can be, solve all kinds of puzzling cases and register to tour the James Bond exhibition, that would be made available online.

The capital of the United States, Washington DC, has a plethora of museums, including 17 from the Smithsonian family, where one can enjoy a voyage to space, see live animals or discover famous women in history from a whole new perspective.

The Air and Space Museum takes visitors to the sky, showcasing the amazing technological achievements in aviation and space exploration through the last century. The National Museum of Women in the Arts situated in DC is the only museum in the world solely dedicated to celebrating the diverse artistic achievements of women. During Women's History Month, they tried to engage audience with a contest.

**SubQuestion No : 108**

**Q.108 Which of the following is NOT an exclusive activity of the women's museum situated in DC?**

- Ans
- 1. It celebrates women's history month
  - 2. It organises contests to engage customers
  - 3. It celebrates varied artistic accomplishments of women
  - 4. It is the only museum dedicated to women

Question ID : 63068035685

Status : Answered

Chosen Option : 3

**Comprehension:**

With the transport industry in total shambles due to the COVID -19 lockdowns, tourism destinations and other players in the industry have come up with the novel idea of offering virtual tours of popular destinations . This is being done not just to provide relief to the people staying put at their homes, but also to continue to promote themselves amongst their target customers.

These virtual tours also allow destinations and attractions to keep themselves engaged with their customers even during the lockdown. Hence, many have designed, a 360° virtual tour to allow the potential tourists to get a foretaste of the real experience.

One of the top tourist attractions of the world, the New York City has rounded up online resources from museums, galleries, comedy clubs, theaters, and other venues so that the audience can experience the best of the Big Apple virtually, while maintaining social distancing.

The city's famous Broadway has recalibrated its famous productions and is streaming them through social media for public viewing. While the Amazing Max is on hiatus from Off-Broadway performances, he himself will offer online magic lessons for the kids.

Many public libraries have opened their collections for public access. On Spyscape's website, one can learn what kind of spy he or she can be, solve all kinds of puzzling cases and register to tour the James Bond exhibition, that would be made available online.

The capital of the United States, Washington DC, has a plethora of museums, including 17 from the Smithsonian family, where one can enjoy a voyage to space, see live animals or discover famous women in history from a whole new perspective.

The Air and Space Museum takes visitors to the sky, showcasing the amazing technological achievements in aviation and space exploration through the last century. The National Museum of Women in the Arts situated in DC is the only museum in the world solely dedicated to celebrating the diverse artistic achievements of women. During Women's History Month, they tried to engage audience with a contest.

**SubQuestion No : 109**

**Q.109 Public interest in tourism is sustained through all the following activities EXCEPT**

- Ans**
- 1. Live streaming of Broadway productions
  - 2. Voyage to Space by Smithsonian museum
  - 3. On line quiz shows for kids each day.
  - 4. Opening up access to books by various libraries

Question ID : **63068035686**

Status : **Answered**

Chosen Option : **3**

**Comprehension:**

With the transport industry in total shambles due to the COVID -19 lockdowns, tourism destinations and other players in the industry have come up with the novel idea of offering virtual tours of popular destinations . This is being done not just to provide relief to the people staying put at their homes, but also to continue to promote themselves amongst their target customers.

These virtual tours also allow destinations and attractions to keep themselves engaged with their customers even during the lockdown. Hence, many have designed, a 360° virtual tour to allow the potential tourists to get a foretaste of the real experience.

One of the top tourist attractions of the world, the New York City has rounded up online resources from museums, galleries, comedy clubs, theaters, and other venues so that the audience can experience the best of the Big Apple virtually, while maintaining social distancing.

The city's famous Broadway has recalibrated its famous productions and is streaming them through social media for public viewing. While the Amazing Max is on hiatus from Off-Broadway performances, he himself will offer online magic lessons for the kids.

Many public libraries have opened their collections for public access. On Spyscape's website, one can learn what kind of spy he or she can be, solve all kinds of puzzling cases and register to tour the James Bond exhibition, that would be made available online.

The capital of the United States, Washington DC, has a plethora of museums, including 17 from the Smithsonian family, where one can enjoy a voyage to space, see live animals or discover famous women in history from a whole new perspective.

The Air and Space Museum takes visitors to the sky, showcasing the amazing technological achievements in aviation and space exploration through the last century. The National Museum of Women in the Arts situated in DC is the only museum in the world solely dedicated to celebrating the diverse artistic achievements of women. During Women's History Month, they tried to engage audience with a contest.

**SubQuestion No : 110**

**Q.110 A word used in the passage which means 'overabundance' is:**

- Ans
- 1. shambles
  - 2. virtual
  - 3. plethora
  - 4. recalibrated

Question ID : 63068035687

Status : Answered

Chosen Option : 3

**Q.111 'Anita went to Bank to withdraw money' ਵਾਕ ਦਾ ਸਹੀ ਪੰਜਾਬੀ ਅਨੁਵਾਦ ਹੈ:-**

- Ans
- 1. ਪੈਸੇ ਕਢਵਾਉਣ ਲਈ ਅਨੀਤਾ ਨੂੰ ਬੈਂਕ ਜਾਣਾ ਪਿਆ।
  - 2. ਅਨੀਤਾ ਬੈਂਕ ਪੈਸੇ ਕਢਵਾਉਣ ਗਈ।
  - 3. ਅਨੀਤਾ ਪੈਸੇ ਕਢਵਾਉਣ ਲਈ ਬੈਂਕ ਗਈ।
  - 4. ਅਨੀਤਾ ਬੈਂਕ ਗਈ ਤਾਂ ਕਿ ਪੈਸੇ ਕਢਵਾ ਸਕੇ।

Question ID : 63068047556

Status : Answered

Chosen Option : 3

Q.112 'ਨਿਪੁੰਨ' ਸ਼ਬਦ ਦਾ ਵਿਰੋਧੀ ਸ਼ਬਦ ਚੁਣੋ।

- Ans
- 1. ਨਿਵੇਕਲਾ
  - 2. ਨਾਲਾਇਕ
  - 3. ਤਜਰਬੇਕਾਰ
  - 4. ਅਨੁਭਵ

Question ID : 63068047526  
Status : Answered  
Chosen Option : 2

Q.113 'ਕੁੱਤਾ ਭੌਂਕੇ ਚੰਨ ਨੂੰ' ਅਖਾਣ ਦਾ ਅਰਥ ਸਪੱਸ਼ਟ ਕਰੋ।

- Ans
- 1. ਨਿੰਦਕਾਂ ਨੂੰ ਰਾਜ਼ੀ ਕਰਨਾ
  - 2. ਨਿੰਦਕਾਂ ਦੀ ਪਰਵਾਹ ਨਾ ਕਰਨੀ
  - 3. ਨਿੰਦਕਾਂ ਬਾਰੇ ਸੋਚਣਾ
  - 4. ਨਿੰਦਕਾਂ ਦੀ ਪਰਵਾਹ ਕਰਨੀ

Question ID : 63068047535  
Status : Answered  
Chosen Option : 2

Q.114 'ਧੋਖਾ ਦਵੇ ਅਤੇ ਅੱਖੇ ਵੇਲੇ ਸਾਥ ਛੱਡ ਦਵੇ' ਲਈ ਇਕ ਸ਼ਬਦ ਚੁਣੋ।

- Ans
- 1. ਦਿਆਨਤਦਾਰ
  - 2. ਗੱਦਾਰ
  - 3. ਦੁਸ਼ਮਣ
  - 4. ਝੂਠਾ

Question ID : 63068047546  
Status : Answered  
Chosen Option : 2

Q.115 ਹੇਠ ਲਿਖਿਆਂ ਵਿੱਚੋਂ ਸੁੱਧ ਸ਼ਬਦ ਚੁਣੋ।

- Ans
- 1. ਕਹਾਨੀਕਾਰ
  - 2. ਕਹਨੀਕਾਰ
  - 3. ਕਹਣੀਕਾਰ
  - 4. ਕਹਾਣੀਕਾਰ

Question ID : 63068047506  
Status : Answered  
Chosen Option : 4

Comprehension:

ਹੇਠ ਲਿਖੇ ਪੈਰੇ ਨੂੰ ਧਿਆਨ ਨਾਲ ਪੜ੍ਹੋ ਅਤੇ ਹੇਠਾਂ ਦਿੱਤੇ ਪ੍ਰਸ਼ਨਾਂ ਦੇ ਉਤਰ ਦਿਉ।

ਪਰ ਉਤਰ-ਆਧੁਨਿਕ ਪ੍ਰੇਮ (ਵੈਲੇਨਟਾਈਨ ਦਿਵਸ) 14 ਫਰਵਰੀ ਨੂੰ ਮਨਾਏ ਜਾਣ ਵਾਲਾ ਤਿਉਹਾਰ ਵਿਚ ਦੱਸਣਾ ਪੈਂਦਾ ਹੈ ਕਿ ਮੈਂ ਤੈਨੂੰ ਪ੍ਰੇਮ ਕਰਦਾ ਹਾਂ ਅਤੇ ਅਗਲੇ ਨੂੰ ਮਜ਼ਬੂਰ ਕਰਨਾ ਪੈਂਦਾ ਹੈ ਕਿ ਤੂੰ ਵੀ ਮੈਨੂੰ ਪ੍ਰੇਮ ਕਰ। ਇਸ ਪ੍ਰੇਮ ਨੂੰ ਠੁੰਮਣਾ ਦੇਣ ਲਈ ਪੂਰੀ ਸਰਮਾਏਦਾਰ ਮੰਡੀ ਹਾਜ਼ਰ ਹੈ। ਇਸ ਤਿਉਹਾਰ ਨਾਲ ਸਬੰਧਿਤ ਕਰੋੜਾਂ ਰੁਪਏ ਦੇ ਇਸਤਿਹਾਰ ਛਪਦੇ ਹਨ। ਮਹਿੰਗੇ ਕਾਰਡਾਂ ਅਤੇ ਹੋਰ ਪ੍ਰੇਮ-ਨਿਸ਼ਨੀਆਂ ਦੀਆਂ ਹੱਟੀਆਂ ਸੱਜਦੀਆਂ ਹਨ। ਅਣਖੁੱਲ੍ਹੇ ਬੂਟੇ ਉੱਤੇ ਪੁਜਦੇ ਕਰਨ ਲਈ ਉਚੇਚੇ ਗੁਲਦਸਤੇ ਗੁੰਦੇ ਜਾਂਦੇ ਹਨ। ਵਿਸ਼ੇਸ਼ ਪੁਸ਼ਾਕਾਂ ਵਿਕਦੀਆਂ ਹਨ। ਹੋਟਲ ਮਹਿੰਗੇ ਭਾਅ ਵਾਲੇ ਜਸ਼ਨ ਮਨਾਉਂਦੇ ਹਨ। ਵਗੈਰਾ ਵਗੈਰਾ।

ਬ੍ਰਹਮ ਗਿਆਨੀ ਨੇ ਦੱਸਿਆ ਸੀ : ਢਾਈ ਅਕਸਰ ਪ੍ਰੇਮ ਕੇ, ਪੜ੍ਹੇ ਸੇ ਗਿਆਨੀ ਹੋਏ।

ਉੱਤਰ-ਆਧੁਨਿਕ ਪ੍ਰੇਮ (ਵੈਲੇਨਟਾਈਨ ਦਿਵਸ) ਵਿਚ 'ਢਾਈ ਅੱਖਰਾਂ' ਤੋਂ ਤਰੱਕੀ ਕਰ ਕੇ ਤਾਂ ਤਿੰਨ ਸ਼ਬਦਾਂ ਬਣਾ ਲਏ ਹਨ, "ਆਈ ਲਵ ਯੂ", ਪਰ ਗਿਆਨ ਦਾ ਦਰ ਕਿਤੇ ਪਿੱਛੇ ਹੀ ਰਹਿ ਗਿਆ। ਹਨੇਰੇ ਵਿਚ ਜਦੋਂ ਸਮਾਂ ਰੋਸ਼ਨ ਹੁੰਦੀ ਹੈ, ਜੇ ਉਹ ਸੱਚ-ਮੁੱਚ ਰੋਸ਼ਨ ਹੋ ਗਈ ਹੋਵੇ, ਕੀ ਇਹ ਦੱਸਣ ਦੀ ਲੋੜ ਬਾਕੀ ਰਹਿ ਜਾਂਦੀ ਹੈ ਕਿ ਦੇਖੋ, ਸਮਾਂ ਜਗ ਪਈ? ਅਜਿਹੀ ਦੱਸ-ਦਸਾਈ ਤਾਂ ਕੇਵਲ ਨੇਤਰਹੀਣਾਂ ਦੇ ਦੁਰਭਾਗ ਵਿਚ ਹੁੰਦੀ ਹੈ। ਇਹ ਪ੍ਰੇਮ ਦਿਵਸ ਦਾ ਇਕ ਪੱਖ ਤਾਂ ਖਾਸ ਕਰਕੇ ਵਿਕਰਾਲ ਹੈ।

SubQuestion No : 116

Q.116 ਉਪਰੋਕਤ ਪੈਰੇ ਦਾ ਢੁਕਵਾਂ ਸਿਰਲੇਖ ਹੈ।

Ans

- 1. ਈਲੂ-ਈਲੂ
- 2. ਉਤਰ ਆਧੁਨਿਕ ਪ੍ਰੇਮ
- 3. ਪ੍ਰੇਮ
- 4. ਆਧੁਨਿਕ ਪ੍ਰੇਮ

Question ID : 63068047583

Status : Answered

Chosen Option : 4

Comprehension:

ਹੇਠ ਲਿਖੇ ਪੈਰੇ ਨੂੰ ਧਿਆਨ ਨਾਲ ਪੜ੍ਹੋ ਅਤੇ ਹੇਠਾਂ ਦਿੱਤੇ ਪ੍ਰਸ਼ਨਾਂ ਦੇ ਉਤਰ ਦਿਉ।

ਪਰ ਉਤਰ-ਆਧੁਨਿਕ ਪ੍ਰੇਮ (ਵੈਲੇਨਟਾਈਨ ਦਿਵਸ) 14 ਫਰਵਰੀ ਨੂੰ ਮਨਾਏ ਜਾਣ ਵਾਲਾ ਤਿਉਹਾਰ ਵਿਚ ਦੱਸਣਾ ਪੈਂਦਾ ਹੈ ਕਿ ਮੈਂ ਤੈਨੂੰ ਪ੍ਰੇਮ ਕਰਦਾ ਹਾਂ ਅਤੇ ਅਗਲੇ ਨੂੰ ਮਜ਼ਬੂਰ ਕਰਨਾ ਪੈਂਦਾ ਹੈ ਕਿ ਤੂੰ ਵੀ ਮੈਨੂੰ ਪ੍ਰੇਮ ਕਰ। ਇਸ ਪ੍ਰੇਮ ਨੂੰ ਠੁੰਮਣਾ ਦੇਣ ਲਈ ਪੂਰੀ ਸਰਮਾਏਦਾਰ ਮੰਡੀ ਹਾਜ਼ਰ ਹੈ। ਇਸ ਤਿਉਹਾਰ ਨਾਲ ਸਬੰਧਿਤ ਕਰੋੜਾਂ ਰੁਪਏ ਦੇ ਇਸਤਿਹਾਰ ਛਪਦੇ ਹਨ। ਮਹਿੰਗੇ ਕਾਰਡਾਂ ਅਤੇ ਹੋਰ ਪ੍ਰੇਮ-ਨਿਸ਼ਨੀਆਂ ਦੀਆਂ ਹੱਟੀਆਂ ਸੱਜਦੀਆਂ ਹਨ। ਅਣਖੁੱਲ੍ਹੇ ਬੂਹੇ ਉੱਤੇ ਪੁਜਦੇ ਕਰਨ ਲਈ ਉਚੇਚੇ ਗੁਲਦਸਤੇ ਗੁੰਦੇ ਜਾਂਦੇ ਹਨ। ਵਿਸ਼ੇਸ਼ ਪੁਸ਼ਾਕਾਂ ਵਿਕਦੀਆਂ ਹਨ। ਹੋਟਲ ਮਹਿੰਗੇ ਭਾਅ ਵਾਲੇ ਜਸ਼ਨ ਮਨਾਉਂਦੇ ਹਨ। ਵਗੈਰਾ ਵਗੈਰਾ।

ਬ੍ਰਹਮ ਗਿਆਨੀ ਨੇ ਦੱਸਿਆ ਸੀ : ਢਾਈ ਅਕਸਰ ਪ੍ਰੇਮ ਕੇ, ਪੜ੍ਹੇ ਸੇ ਗਿਆਨੀ ਹੋਏ।

ਉੱਤਰ-ਆਧੁਨਿਕ ਪ੍ਰੇਮ (ਵੈਲੇਨਟਾਈਨ ਦਿਵਸ) ਵਿਚ 'ਢਾਈ ਅੱਖਰਾਂ' ਤੋਂ ਤਰੱਕੀ ਕਰ ਕੇ ਤਾਂ ਤਿੰਨ ਸ਼ਬਦਾਂ ਬਣਾ ਲਏ ਹਨ, "ਆਈ ਲਵ ਯੂ", ਪਰ ਗਿਆਨ ਦਾ ਦਰ ਕਿਤੇ ਪਿੱਛੇ ਹੀ ਰਹਿ ਗਿਆ। ਹਨੇਰੇ ਵਿਚ ਜਦੋਂ ਸਮਾਂ ਰੋਸ਼ਨ ਹੁੰਦੀ ਹੈ, ਜੇ ਉਹ ਸੱਚ-ਮੁੱਚ ਰੋਸ਼ਨ ਹੋ ਗਈ ਹੋਵੇ, ਕੀ ਇਹ ਦੱਸਣ ਦੀ ਲੋੜ ਬਾਕੀ ਰਹਿ ਜਾਂਦੀ ਹੈ ਕਿ ਦੇਖੋ, ਸਮਾਂ ਜਗ ਪਈ? ਅਜਿਹੀ ਦੱਸ-ਦਸਾਈ ਤਾਂ ਕੇਵਲ ਨੇਤਰਹੀਣਾਂ ਦੇ ਦੁਰਭਾਗ ਵਿਚ ਹੁੰਦੀ ਹੈ। ਇਹ ਪ੍ਰੇਮ ਦਿਵਸ ਦਾ ਇਕ ਪੱਖ ਤਾਂ ਖਾਸ ਕਰਕੇ ਵਿਕਰਾਲ ਹੈ।

SubQuestion No : 117

Q.117 ਉੱਤਰ ਆਧੁਨਿਕ ਪ੍ਰੇਮ ਦਾ ਪ੍ਰਤੀਕ ਨਹੀਂ ਹੈ।

Ans

- 1. ਪਿਆਰ ਵਿਚ ਬਲੀਦਾਨ ਦੇਣਾ
- 2. ਕਰੋੜਾਂ ਰੁਪਏ ਦੀ ਇਸਤਿਹਾਰਬਾਜ਼ੀ
- 3. ਇਕ ਧਿਰ ਦਾ ਦੂਜੀ ਧਿਰ ਨੂੰ ਦੱਸਣਾ ਕਿ ਮੈਂ ਤੈਨੂੰ ਪ੍ਰੇਮ ਕਰਦਾ/ ਕਰਦੀ ਹਾਂ
- 4. ਇਕ ਦੂਜੇ ਨੂੰ ਪ੍ਰੇਮ ਕਰਨ ਲਈ ਮਜ਼ਬੂਰ ਕਰਨਾ

Question ID : 63068047584

Status : Answered

Chosen Option : 1

Comprehension:

ਹੇਠ ਲਿਖੇ ਪੈਰੇ ਨੂੰ ਧਿਆਨ ਨਾਲ ਪੜ੍ਹੋ ਅਤੇ ਹੇਠਾਂ ਦਿੱਤੇ ਪ੍ਰਸ਼ਨਾਂ ਦੇ ਉਤਰ ਦਿਉ।

ਪਰ ਉਤਰ-ਆਧੁਨਿਕ ਪ੍ਰੇਮ (ਵੈਲੇਨਟਾਈਨ ਦਿਵਸ) 14 ਫਰਵਰੀ ਨੂੰ ਮਨਾਏ ਜਾਣ ਵਾਲਾ ਤਿਉਹਾਰ ਵਿਚ ਦੱਸਣਾ ਪੈਂਦਾ ਹੈ ਕਿ ਮੈਂ ਤੈਨੂੰ ਪ੍ਰੇਮ ਕਰਦਾ ਹਾਂ ਅਤੇ ਅਗਲੇ ਨੂੰ ਮਜ਼ਬੂਰ ਕਰਨਾ ਪੈਂਦਾ ਹੈ ਕਿ ਤੂੰ ਵੀ ਮੈਨੂੰ ਪ੍ਰੇਮ ਕਰ। ਇਸ ਪ੍ਰੇਮ ਨੂੰ ਠੁੰਮਣਾ ਦੇਣ ਲਈ ਪੂਰੀ ਸਰਮਾਏਦਾਰ ਮੰਡੀ ਹਾਜ਼ਰ ਹੈ। ਇਸ ਤਿਉਹਾਰ ਨਾਲ ਸਬੰਧਿਤ ਕਰੋੜਾਂ ਰੁਪਏ ਦੇ ਇਸਤਿਹਾਰ ਛਪਦੇ ਹਨ। ਮਹਿੰਗੇ ਕਾਰਡਾਂ ਅਤੇ ਹੋਰ ਪ੍ਰੇਮ-ਨਿਸ਼ਾਨੀਆਂ ਦੀਆਂ ਹੱਟੀਆਂ ਸੱਜਦੀਆਂ ਹਨ। ਅਣਖੁੱਲ੍ਹੇ ਬੂਹੇ ਉੱਤੇ ਪੁਜਦੇ ਕਰਨ ਲਈ ਉਚੇਚੇ ਗੁਲਦਸਤੇ ਗੁੰਦੇ ਜਾਂਦੇ ਹਨ। ਵਿਸ਼ੇਸ਼ ਪੁਸ਼ਾਕਾਂ ਵਿਕਦੀਆਂ ਹਨ। ਹੋਟਲ ਮਹਿੰਗੇ ਭਾਅ ਵਾਲੇ ਜਸ਼ਨ ਮਨਾਉਂਦੇ ਹਨ। ਵਗੈਰਾ ਵਗੈਰਾ।

ਬ੍ਰਹਮ ਗਿਆਨੀ ਨੇ ਦੱਸਿਆ ਸੀ : ਢਾਈ ਅਕਸਰ ਪ੍ਰੇਮ ਕੇ, ਪੜ੍ਹੇ ਸੇ ਗਿਆਨੀ ਹੋਏ।

ਉੱਤਰ-ਆਧੁਨਿਕ ਪ੍ਰੇਮ (ਵੈਲੇਨਟਾਈਨ ਦਿਵਸ) ਵਿਚ 'ਢਾਈ ਅੱਖਰਾਂ' ਤੋਂ ਤਰੱਕੀ ਕਰ ਕੇ ਤਾਂ ਤਿੰਨ ਸ਼ਬਦ 'ਬਣਾ ਲਏ ਹਨ, "ਆਈ ਲਵ ਯੂ", ਪਰ ਗਿਆਨ ਦਾ ਦਰ ਕਿਤੇ ਪਿੱਛੇ ਹੀ ਰਹਿ ਗਿਆ। ਹਨੇਰੇ ਵਿਚ ਜਦੋਂ ਸਮਾਂ ਰੋਸ਼ਨ ਹੁੰਦੀ ਹੈ, ਜੇ ਉਹ ਸੱਚ-ਮੁੱਚ ਰੋਸ਼ਨ ਹੋ ਗਈ ਹੋਵੇ, ਕੀ ਇਹ ਦੱਸਣ ਦੀ ਲੋੜ ਬਾਕੀ ਰਹਿ ਜਾਂਦੀ ਹੈ ਕਿ ਦੇਖੋ, ਸਮਾਂ ਜਗ ਪਈ? ਅਜਿਹੀ ਦੱਸ-ਦਸਾਈ ਤਾਂ ਕੇਵਲ ਨੇਤਰਹੀਣਾਂ ਦੇ ਦੁਰਭਾਗ ਵਿਚ ਹੁੰਦੀ ਹੈ। ਇਹ ਪ੍ਰੇਮ ਦਿਵਸ ਦਾ ਇਕ ਪੱਖ ਤਾਂ ਖਾਸ ਕਰਕੇ ਵਿਕਰਾਲ ਹੈ।

SubQuestion No : 118

Q.118 ਵੈਲੇਨਟਾਈਨ ਦਿਵਸ ਕਿਵੇਂ ਮਨਾਇਆ ਜਾਂਦਾ ਹੈ?

Ans

- 1. ਆਈ ਡੌਟ ਲਵ ਯੂ ਕਹਿ ਕੇ
- 2. ਗੰਦੇ ਪੁਸ਼ਾਕਾਂ ਪਾ ਕੇ ਤੇ ਹੋਟਲਾਂ ਵਿਚ ਜਾ ਕੇ
- 3. ਮਹਿੰਗੇ ਕਾਰਡਾਂ ਅਤੇ ਪ੍ਰੇਮ ਨਿਸ਼ਾਨੀਆਂ ਨਾਲ
- 4. ਗੁਲਦਸਤੇ ਨਾ ਦੇ ਕੇ ਅਤੇ ਬੰਦ ਬੂਹੇ ਕਰਕੇ

Question ID : 63068047585

Status : Answered

Chosen Option : 3



Comprehension:

ਹੇਠ ਲਿਖੇ ਪੈਰੇ ਨੂੰ ਧਿਆਨ ਨਾਲ ਪੜ੍ਹੋ ਅਤੇ ਹੇਠਾਂ ਦਿੱਤੇ ਪ੍ਰਸ਼ਨਾਂ ਦੇ ਉਤਰ ਦਿਉ।

ਪਰ ਉਤਰ-ਆਧੁਨਿਕ ਪ੍ਰੇਮ (ਵੈਲੇਨਟਾਈਨ ਦਿਵਸ) 14 ਫਰਵਰੀ ਨੂੰ ਮਨਾਏ ਜਾਣ ਵਾਲਾ ਤਿਉਹਾਰ ਵਿਚ ਦੱਸਣਾ ਪੈਂਦਾ ਹੈ ਕਿ ਮੈਂ ਤੈਨੂੰ ਪ੍ਰੇਮ ਕਰਦਾ ਹਾਂ ਅਤੇ ਅਗਲੇ ਨੂੰ ਮਜ਼ਬੂਰ ਕਰਨਾ ਪੈਂਦਾ ਹੈ ਕਿ ਤੂੰ ਵੀ ਮੈਨੂੰ ਪ੍ਰੇਮ ਕਰ। ਇਸ ਪ੍ਰੇਮ ਨੂੰ ਠੁੰਮਣਾ ਦੇਣ ਲਈ ਪੂਰੀ ਸਰਮਾਏਦਾਰ ਮੰਡੀ ਹਾਜ਼ਰ ਹੈ। ਇਸ ਤਿਉਹਾਰ ਨਾਲ ਸਬੰਧਿਤ ਕਰੋੜਾਂ ਰੁਪਏ ਦੇ ਇਸਤਿਹਾਰ ਛਪਦੇ ਹਨ। ਮਹਿੰਗੇ ਕਾਰਡਾਂ ਅਤੇ ਹੋਰ ਪ੍ਰੇਮ-ਨਿਸ਼ਨੀਆਂ ਦੀਆਂ ਹੱਟੀਆਂ ਸੱਜਦੀਆਂ ਹਨ। ਅਣਖੁੱਲ੍ਹੇ ਬੂਹੇ ਉੱਤੇ ਪੁਜਦੇ ਕਰਨ ਲਈ ਉਚੇਚੇ ਗੁਲਦਸਤੇ ਗੁੰਦੇ ਜਾਂਦੇ ਹਨ। ਵਿਸ਼ੇਸ਼ ਪੁਸ਼ਾਕਾਂ ਵਿਕਦੀਆਂ ਹਨ। ਹੋਟਲ ਮਹਿੰਗੇ ਭਾਅ ਵਾਲੇ ਜਸ਼ਨ ਮਨਾਉਂਦੇ ਹਨ। ਵਗੈਰਾ ਵਗੈਰਾ।

ਬ੍ਰਹਮ ਗਿਆਨੀ ਨੇ ਦੱਸਿਆ ਸੀ : ਢਾਈ ਅਕਸਰ ਪ੍ਰੇਮ ਕੇ, ਪੜ੍ਹੇ ਸੇ ਗਿਆਨੀ ਹੋਏ।

ਉੱਤਰ-ਆਧੁਨਿਕ ਪ੍ਰੇਮ (ਵੈਲੇਨਟਾਈਨ ਦਿਵਸ) ਵਿਚ 'ਢਾਈ ਅੱਖਰਾਂ' ਤੋਂ ਤਰੱਕੀ ਕਰ ਕੇ ਤਾਂ ਤਿੰਨ ਸ਼ਬਦ 'ਬਣਾ ਲਏ ਹਨ, "ਆਈ ਲਵ ਯੂ", ਪਰ ਗਿਆਨ ਦਾ ਦਰ ਕਿਤੇ ਪਿੱਛੇ ਹੀ ਰਹਿ ਗਿਆ। ਹਨੇਰੇ ਵਿਚ ਜਦੋਂ ਸਮਾਂ ਰੋਸ਼ਨ ਹੁੰਦੀ ਹੈ, ਜੇ ਉਹ ਸੱਚ-ਮੁੱਚ ਰੋਸ਼ਨ ਹੋ ਗਈ ਹੋਵੇ, ਕੀ ਇਹ ਦੱਸਣ ਦੀ ਲੋੜ ਬਾਕੀ ਰਹਿ ਜਾਂਦੀ ਹੈ ਕਿ ਦੇਖੋ, ਸਮਾਂ ਜਗ ਪਈ? ਅਜਿਹੀ ਦੱਸ-ਦਸਾਈ ਤਾਂ ਕੇਵਲ ਨੇਤਰਹੀਣਾਂ ਦੇ ਦੁਰਭਾਗ ਵਿਚ ਹੁੰਦੀ ਹੈ। ਇਹ ਪ੍ਰੇਮ ਦਿਵਸ ਦਾ ਇਕ ਪੱਖ ਤਾਂ ਖਾਸ ਕਰਕੇ ਵਿਕਰਾਲ ਹੈ।

SubQuestion No : 119

Q.119 ਬ੍ਰਹਮ ਗਿਆਨੀ ਨੇ ਪ੍ਰੇਮ ਦੇ ਗਿਆਨ ਬਾਰੇ ਕੀ ਆਖਿਆ ਸੀ?

Ans

- 1. ਢਾਈ ਅੱਖਰ ਪੜ੍ਹੇ ਤੇ ਲਿਖੇ
- 2. ਪੈਂਤੀ ਅੱਖਰੀ ਪੜ੍ਹ ਕੇ ਗਿਆਨੀ ਬਣੇ
- 3. ਢਾਈ ਅੱਖਰਾਂ ਰਾਹੀਂ ਪੂਰੀ ਲੋਕਾਈ ਨੂੰ ਪ੍ਰੇਮ ਕਰੋ
- 4. ਇਕ ਦੂਜੇ ਸੰਗ ਨਫਰਤ ਕਰੋ

Question ID : 63068047586

Status : Answered

Chosen Option : 3

Comprehension:

ਹੇਠ ਲਿਖੇ ਪੈਰੇ ਨੂੰ ਧਿਆਨ ਨਾਲ ਪੜ੍ਹੋ ਅਤੇ ਹੇਠਾਂ ਦਿੱਤੇ ਪ੍ਰਸ਼ਨਾਂ ਦੇ ਉਤਰ ਦਿਉ।

ਪਰ ਉਤਰ-ਆਧੁਨਿਕ ਪ੍ਰੋਮ (ਵੈਲੋਨਟਾਈਨ ਦਿਵਸ) 14 ਫਰਵਰੀ ਨੂੰ ਮਨਾਏ ਜਾਣ ਵਾਲਾ ਤਿਉਹਾਰ ਵਿਚ ਦੱਸਣਾ ਪੈਂਦਾ ਹੈ ਕਿ ਮੈਂ ਤੈਨੂੰ ਪ੍ਰੋਮ ਕਰਦਾ ਹਾਂ ਅਤੇ ਅਗਲੇ ਨੂੰ ਮਜ਼ਬੂਰ ਕਰਨਾ ਪੈਂਦਾ ਹੈ ਕਿ ਤੂੰ ਵੀ ਮੈਨੂੰ ਪ੍ਰੋਮ ਕਰ। ਇਸ ਪ੍ਰੋਮ ਨੂੰ ਠੁੰਮਣਾ ਦੇਣ ਲਈ ਪੂਰੀ ਸਰਮਾਏਦਾਰ ਮੰਡੀ ਹਾਜ਼ਰ ਹੈ। ਇਸ ਤਿਉਹਾਰ ਨਾਲ ਸਬੰਧਿਤ ਕਰੋੜਾਂ ਰੁਪਏ ਦੇ ਇਸਤਿਹਾਰ ਛਪਦੇ ਹਨ। ਮਹਿੰਗੇ ਕਾਰਡਾਂ ਅਤੇ ਹੋਰ ਪ੍ਰੋਮ-ਨਿਸ਼ਨੀਆਂ ਦੀਆਂ ਹੱਟੀਆਂ ਸੱਜਦੀਆਂ ਹਨ। ਅਣਖੁੱਲ੍ਹੇ ਬੂਹੇ ਉੱਤੇ ਪੁਜਦੇ ਕਰਨ ਲਈ ਉਚੇਚੇ ਗੁਲਦਸਤੇ ਗੁੰਦੇ ਜਾਂਦੇ ਹਨ। ਵਿਸ਼ੇਸ਼ ਪੁਸ਼ਾਕਾਂ ਵਿਕਦੀਆਂ ਹਨ। ਹੋਟਲ ਮਹਿੰਗੇ ਭਾਅ ਵਾਲੇ ਜਸ਼ਨ ਮਨਾਉਂਦੇ ਹਨ। ਵਗੈਰਾ ਵਗੈਰਾ।

ਬ੍ਰਹਮ ਗਿਆਨੀ ਨੇ ਦੱਸਿਆ ਸੀ : ਢਾਈ ਅਕਸਰ ਪ੍ਰੋਮ ਕੇ, ਪੜ੍ਹੇ ਸੇ ਗਿਆਨੀ ਹੋਏ।

ਉੱਤਰ-ਆਧੁਨਿਕ ਪ੍ਰੋਮ (ਵੈਲੋਨਟਾਈਨ ਦਿਵਸ) ਵਿਚ 'ਢਾਈ ਅੱਖਰਾਂ' ਤੋਂ ਤਰੱਕੀ ਕਰ ਕੇ ਤਾਂ ਤਿੰਨ ਸ਼ਬਦ 'ਬਣਾ ਲਏ ਹਨ, "ਆਈ ਲਵ ਯੂ", ਪਰ ਗਿਆਨ ਦਾ ਦਰ ਕਿਤੇ ਪਿੱਛੇ ਹੀ ਰਹਿ ਗਿਆ। ਹਨੇਰੇ ਵਿਚ ਜਦੋਂ ਸਮਾਂ ਰੋਸ਼ਨ ਹੁੰਦੀ ਹੈ, ਜੇ ਉਹ ਸੱਚ-ਮੁੱਚ ਰੋਸ਼ਨ ਹੋ ਗਈ ਹੋਵੇ, ਕੀ ਇਹ ਦੱਸਣ ਦੀ ਲੋੜ ਬਾਕੀ ਰਹਿ ਜਾਂਦੀ ਹੈ ਕਿ ਦੇਖੋ, ਸਮਾਂ ਜਗ ਪਈ? ਅਜਿਹੀ ਦੱਸ-ਦਸਾਈ ਤਾਂ ਕੇਵਲ ਨੇਤਰਹੀਣਾਂ ਦੇ ਦੁਰਭਾਗ ਵਿਚ ਹੁੰਦੀ ਹੈ। ਇਹ ਪ੍ਰੋਮ ਦਿਵਸ ਦਾ ਇਕ ਪੱਖ ਤਾਂ ਖਾਸ ਕਰਕੇ ਵਿਕਰਾਲ ਹੈ।

SubQuestion No : 120

Q.120 ਉੱਤਰ ਆਧੁਨਿਕ ਪ੍ਰੋਮ ਦੀ ਤਾਸੀਰ ਕੀ ਹੈ?

Ans

- 1. ਦਿਲੋਂ ਪ੍ਰੋਮ
- 2. ਦਿਖਾਵੇ ਦਾ ਪਿਆਰ
- 3. ਪ੍ਰੋਮ ਪ੍ਰਤੀ ਇਮਾਨਦਾਰੀ
- 4. ਪ੍ਰੋਮ ਪ੍ਰਤੀ ਸਮਰਪਣ

Question ID : 63068047587

Status : Answered

Chosen Option : 2

Q.121 Which of the following statements is/are correct?

- I. Full form of PDA is Personal Digital Assistant.
- II. Origin country of Motorola is United States of America.

Ans

- 1. Only II
- 2. Both I and II
- 3. Neither I nor II
- 4. Only I

Question ID : 63068047397

Status : Answered

Chosen Option : 2

Q.122 In MS Excel 2019, which shortcut key is used to select all the contents of a worksheet?

- Ans
- 1. Ctrl + A
  - 2. Ctrl + L
  - 3. Shift + A
  - 4. Shift + L

Question ID : 63068047219  
Status : Answered  
Chosen Option : 1

Q.123 \_\_\_\_\_ is the average number of jobs, processes or sub-requests completed by a system in one unit of time.

- Ans
- 1. Thrashing
  - 2. Throughput
  - 3. Swapping
  - 4. Polling

Question ID : 63068045353  
Status : Answered  
Chosen Option : 1

Q.124 Which of the following are the brands of mobile phones?

- I. Nokia
- II. Samsung
- III. Gionee
- IV. Apple

- Ans
- 1. I, II and III
  - 2. I and III
  - 3. II, III and IV
  - 4. I, II, III and IV

Question ID : 63068047380  
Status : Answered  
Chosen Option : 4

Q.125 The term Web 2.0 was popularised by \_\_\_\_\_.

- Ans
- 1. Norman Abramson
  - 2. Marty Cooper
  - 3. Gerald Lawson
  - 4. Dale Dougherty

Question ID : 63068047297  
Status : Answered  
Chosen Option : 2

Q.126 In an \_\_\_\_\_ technique, manufacturing material is combined together to create 3D object.

- Ans
- 1. comparative manufacturing
  - 2. multiplicative manufacturing
  - 3. subtractive manufacturing
  - 4. additive manufacturing

Question ID : 63068047179  
Status : Answered  
Chosen Option : 1

Q.127 High-level programming languages such as FORTRAN, COBOL etc. emerged during which generation?

- Ans
- 1. Fourth
  - 2. Fifth
  - 3. Second
  - 4. First

Question ID : 63068044469  
Status : Answered  
Chosen Option : 3

Q.128 RAM stands for:

- Ans
- 1. Random Also Memory
  - 2. Read Also Memory
  - 3. Random Access Memory
  - 4. Read Access Memory

Question ID : 63068047646  
Status : Answered  
Chosen Option : 3

Q.129 'Sending and receiving text/notes with an online friend'. This statement describes which feature of Instant Messaging Programs?

- I. Talk
- II. Instant Messages/Chat

- Ans
- 1. Only I
  - 2. Only II
  - 3. Neither I nor II
  - 4. Both I and II

Question ID : 63068047413  
Status : Answered  
Chosen Option : 2

Q.130 Which of the following is a/are type/s of search in search engines?

- I. File type
- II. Limiting

- Ans
- 1. Both I and II
  - 2. Neither I nor II
  - 3. Only I
  - 4. Only II

Question ID : 63068047327  
Status : Answered  
Chosen Option : 1

Q.131 Which of the following are the photo sharing sites?

- I. Google photos
- II. Icloud photos
- III. Dropbox

- Ans
- 1. I, II and III
  - 2. II and III
  - 3. I and II
  - 4. Only III

Question ID : 63068047401  
Status : Answered  
Chosen Option : 1

Q.132 In MS PowerPoint 2019, which shortcut key is used to ungroup selected group?

- Ans
- 1. Ctrl + Alt + U
  - 2. Ctrl + Shift + U
  - 3. Ctrl + Shift + G
  - 4. Ctrl + Alt + G

Question ID : 63068047255  
Status : Answered  
Chosen Option : 1

Q.133 In MS PowerPoint 2019, which shortcut key is used to right align the selected text?

- Ans
- 1. Ctrl + L
  - 2. Ctrl + E
  - 3. Ctrl + R
  - 4. Ctrl + J

Question ID : 63068047245  
Status : Answered  
Chosen Option : 3

Q.134 In MS Word 2019, which shortcut key is used to decrease the font size by 1 pt?

- Ans
- 1. Ctrl + ]
  - 2. Ctrl + [
  - 3. Ctrl + )
  - 4. Ctrl + C

Question ID : 63068047198  
Status : Answered  
Chosen Option : 2

Q.135 Which of the following are those obstacles that you need to overcome so that you can start generating your share of the internet revenue from the website?

- I. Designing the website
- II. Getting visitors to the website
- III. Converting visitor to customers

- Ans
- 1. Only III
  - 2. I, II and III
  - 3. I and II
  - 4. II and III

Question ID : 63068047359  
Status : Answered  
Chosen Option : 2

Q.136 Meta search engines, are also known as \_\_\_\_\_.

- Ans
- 1. mega files
  - 2. mega directories
  - 3. mega data
  - 4. mega indexes

Question ID : 63068047313  
Status : Answered  
Chosen Option : 3

Q.137 Which of the following statement/s is/are correct?

- I. Messages in Trash folder that are more than few days old will automatically be deleted.
- II. A message can be opened by clicking its 'Subject'.

- Ans
- 1. Both I and II
  - 2. Neither I nor II
  - 3. Only II
  - 4. Only I

Question ID : 63068047375  
Status : Answered  
Chosen Option : 1

Q.138 Light pen uses a \_\_\_\_\_ .

- Ans
- 1. magnetic cell
  - 2. photoelectric cell
  - 3. neuron cell
  - 4. electric cell

Question ID : 63068047162  
Status : Answered  
Chosen Option : 2

Q.139 In MS Excel 2019, which shortcut key is used to maximize currently selected window?

- Ans
- 1. Ctrl + F10
  - 2. Ctrl + F8
  - 3. Ctrl + F11
  - 4. Ctrl + F3

Question ID : 63068047239  
Status : Answered  
Chosen Option : 1

Q.140 In MS Word 2019, which shortcut key is used to change text to heading 1?

- Ans
- 1. Ctrl + Alt + 1
  - 2. Alt + Shift + 1
  - 3. Ctrl + Shift + 1
  - 4. Shift + Tab + 1

Question ID : 63068047214  
Status : Answered  
Chosen Option : 1

Q.141 In MS Word 2019, which mode displays the document without top and bottom page margins and with page break as dotted lines?

- Ans
- 1. Outline
  - 2. Read mode
  - 3. Draft
  - 4. Web Layout

Question ID : 63068047197  
Status : Answered  
Chosen Option : 1

Q.142 Which of the following is a/are type(s) of error correction algorithm used by search engine?

- I. Soundex
- II. Metaphone

- Ans
- 1. Both I and II
  - 2. Only I
  - 3. Neither I nor II
  - 4. Only II

Question ID : 63068047338  
Status : Answered  
Chosen Option : 1

Q.143 What is the full form of URL?

- Ans
- 1. Uniform Register Level
  - 2. Uniform Register Locator
  - 3. Uniform Resource Locator
  - 4. Uniform Resource Level

Question ID : 63068047289  
Status : Answered  
Chosen Option : 3

Q.144 In MS Word 2019, from which tab can we access the gridlines?

- Ans
- 1. Home
  - 2. View
  - 3. Insert
  - 4. Design

Question ID : 63068047200  
Status : Answered  
Chosen Option : 1

Q.145 Which of the following statement is correct about Unix operating system?

- I. It is portable.
- II. It is written in assembly language.

- Ans
- 1. Only II
  - 2. Neither I nor II
  - 3. Both I and II
  - 4. Only I

Question ID : 63068045647  
Status : Answered  
Chosen Option : 1



Q.146 Internet based applications were introduced during which generation?

- Ans
- 1. Third
  - 2. Fifth
  - 3. Fourth
  - 4. Second

Question ID : 63068047125  
Status : Answered  
Chosen Option : 3

Q.147 Which of the following is NOT an internal DOS command?

- Ans
- 1. Delete
  - 2. Copy
  - 3. Tree
  - 4. Rename

Question ID : 63068045634  
Status : Answered  
Chosen Option : 3

Q.148 Which of the following pair/s of secondary storage device type – devices is/ are correct?

- I. Sequential access devices – Magnetic taps
- II. Direct access devices – Zip disk

- Ans
- 1. Both I and II
  - 2. Only II
  - 3. Neither I nor II
  - 4. Only I

Question ID : 63068047185  
Status : Answered  
Chosen Option : 1

Q.149 Which of the following pair of generation of computer – representative system is correct?

- I. First – EDSAC
- II. Third – IBM 360
- III. Fourth – Apple II

- Ans
- 1. I and II
  - 2. II and III
  - 3. I and III
  - 4. I, II and III

Question ID : 63068047135  
Status : Answered  
Chosen Option : 3

Q.150 In 'https://www.abc.com/sharing/pqrl0/U14.pdf', what does 'pqrl0/U14.pdf' stands for?

- Ans
- 1. Protocol
  - 2. File name
  - 3. Domain name
  - 4. Directing

Question ID : 63068047302

Status : Answered

Chosen Option : 1

[www.exammix.com](http://www.exammix.com)

