

Combined Graduate Level Examination-2019 (Tier-I)

Roll Number	www.exammix.com
Candidate Name	www.exammix.com
Venue Name	
Exam Date	03/03/2020
Exam Time	10:00 AM - 11:00 AM
Subject	CGLE Tier I



Section : General Intelligence and Reasoning

Q.1 Which two numbers should be interchanged to make the given equation correct?

$$9 + 7 \times 5 - 18 \div 2 = 3 \times 4 - 10 + 45 \div 5$$

- Ans
- 1. 18 and 45
 - 2. 7 and 4
 - 3. 2 and 5
 - 4. 9 and 3

Question ID : 12356814
Status : Not Answered
Chosen Option : --

Q.2 Arrange the following words in the order in which they appear in an English dictionary.

1. Rightly
2. Rigidly
3. Righteous
4. Rigour
5. Rights

- Ans
- 1. 3, 5, 1, 4, 2
 - 2. 3, 1, 5, 4, 2
 - 3. 3, 1, 5, 2, 4
 - 4. 1, 3, 5, 2, 4

Question ID : 1235682
Status : Answered
Chosen Option : 3

Q.3 Which of the option figures is the exact mirror image of the given figure when the mirror is held at the right side?

RST2PK9LOX

- Ans
- 1. XOJEPK9T2R
 - 2. RST2PK9LOX
 - 3. RST2PK9LOX
 - 4. XOJEPK9T2R

Question ID : 12356823
Status : Answered
Chosen Option : 4

Q.4 The ratio of the present ages of Asha and Lata is 5 : 6. If the difference between their ages is 6 years, then what will be Lata's age will be after 5 years?

- Ans
- 1. 35
 - 2. 41
 - 3. 45
 - 4. 40

Question ID : 12356818
Status : Answered
Chosen Option : 1

Q.5 Select the option in which the numbers are related in the same way as are the numbers in the given set.
(269, 278, 296)

- Ans
- 1. (313, 322, 340)
 - 2. (577, 586, 598)
 - 3. (419, 430, 448)
 - 4. (109, 118, 128)

Question ID : 12356815
Status : Answered
Chosen Option : 1

Q.6 Four letter-clusters have been given, out of which three are alike in some manner, while one is different. Select the odd letter-cluster.

- Ans
- 1. BYGT
 - 2. NMSH
 - 3. FVKO
 - 4. DWIR

Question ID : 1235683
Status : Answered
Chosen Option : 3

Q.7 Amit is the brother of Sonia. Jyoti is the sister of Nikita. Sonia is the daughter of Satish's father. Nikita is the daughter of Kavinder. Jyoti is the mother of Amit. Mukesh is Nikita's only sister's husband. How is Satish related to Kavinder?

- Ans
- 1. Son
 - 2. Brother
 - 3. Grandson
 - 4. Son-in-law

Question ID : 12356810
Status : Not Attempted and Marked For Review
Chosen Option : --

Q.8 Four words have been given, out of which three are alike in some manner, while one is different. Select the odd word.

- Ans**
- 1. Ferry
 - 2. Yacht
 - 3. Submarine
 - 4. Ship

Question ID : 1235684
Status : Answered
Chosen Option : 3

Q.9 In a certain code language, WARDROBE is written as YXVYXHJV. How will ACCURATE be written as in that language?

- Ans**
- 1. BZHPXTBV
 - 2. CZHPYTBV
 - 3. CZGPXTBV
 - 4. DZGPXTBV

Question ID : 1235687
Status : Not Answered
Chosen Option : --

Q.10 Select the number that can replace the question mark (?) in the following series.

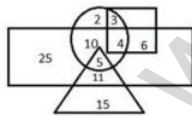
17, 21, 30, 46, 71, ?

- Ans**
- 1. 105
 - 2. 96
 - 3. 107
 - 4. 101

Question ID : 12356812
Status : Answered
Chosen Option : 3

Q.11 The given Venn diagram represents employees in an organisation:

The triangle represents executives, the circle represents females, the rectangle represents MBAs and the square represents technical staff. The numbers given in the diagram represent the number of persons in that particular category.



How many female executives are there in the organisation?

- Ans**
- 1. 10
 - 2. 5
 - 3. 15
 - 4. 11

Question ID : 12356825
Status : Answered
Chosen Option : 2

Q.12 Read the given statements and conclusions carefully. Assuming that the information given in the statements is true, even if it appears to be at variance with commonly known facts, decide which of the given conclusions logically follow(s) from the statements.

Statements:

1. Some animals are elephants.
2. Some elephants are tigers.

Conclusions:

- I. Some animals are tigers.
- II. No tiger is an animal.

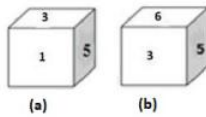
- Ans**
- 1. Only conclusion I follows.
 - 2. Either conclusion I or II follows.
 - 3. Neither conclusion I nor II follows.
 - 4. Only conclusion II follows.

Question ID : 12356811

Status : Answered

Chosen Option : 3

Q.13 Two positions of the same dice are shown. Select the number that will be on the face opposite to the one showing 6.



- Ans**
- 1. 4
 - 2. 5
 - 3. 1
 - 4. 3

Question ID : 12356821

Status : Answered

Chosen Option : 3

Q.14 Select the set of letters that when sequentially placed in the blanks of the given letter series will complete the series.

k _lmm_ mk _mmk_lkkl_m

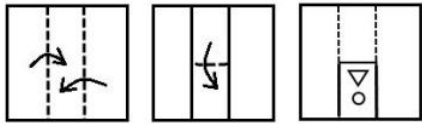
- Ans**
- 1. k, l, m, k, k
 - 2. l, k, m, k, k
 - 3. k, l, k, l, m
 - 4. k, m, m, k, l

Question ID : 1235689

Status : Not Answered

Chosen Option : --

Q.15 The sequence of folding a piece of paper and the manner in which the folded paper has been cut is shown in the following figures. How would this paper look when unfolded?



Ans

- 1.
- 2.
- 3.
- 4.

Question ID : 12356824
 Status : Answered
 Chosen Option : 2

Q.16 Select the option that is related to the third word in the same way as the second word is related to the first word.

Medicine : Disease :: Food : ?

- 1. Energy
- 2. Nutrition
- 3. Thirst
- 4. Hunger

Question ID : 1235685
 Status : Answered
 Chosen Option : 4

Q.17 Select the letter-cluster that can replace the question mark (?) in the following series.

CXB, HUI, MRP, ROW, ?

- Ans
- 1. VKD
 - 2. VKC
 - 3. WLZ
 - 4. WLD

Question ID : 1235681
Status : Not Answered
Chosen Option : --

Q.18 In a certain code language, 'HARVEST' is coded as '22-21-7-24-20-3-10'. How will 'FARMER' be coded as in that language?

- Ans
- 1. 20-7-14-21-3-8
 - 2. 19-7-15-19-3-8
 - 3. 19-7-15-20-3-7
 - 4. 20-7-15-20-3-8

Question ID : 1235688
Status : Not Answered
Chosen Option : --

Q.19 Select the option that is related to the third number in the same way as the second number is related to the first number and the sixth number is related to the fifth number.

12 : 72 :: 18 : ? :: 22 : 242

- Ans
- 1. 162
 - 2. 164
 - 3. 140
 - 4. 160

Question ID : 12356813
Status : Answered
Chosen Option : 1

Q.20 Select the option in which the words share the same relationship as that shared by the given pair of words.

Clock : Time

- Ans
- 1. Ammeter : Current
 - 2. Taseometer : Wind
 - 3. Balance : Scale
 - 4. Anemometer : Strains

Question ID : 1235686
Status : Answered
Chosen Option : 1

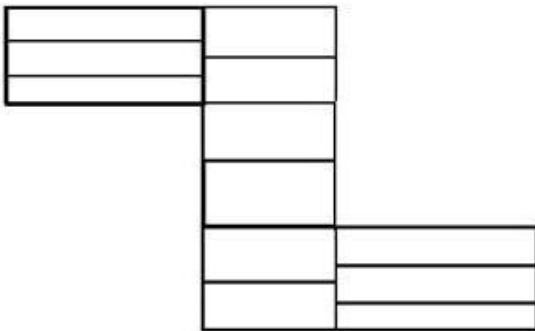
Q.21 Study the given pattern carefully and select the number that can replace the question mark (?) in it.

6	21	14
40	500	?
8	25	7

- Ans
- 1. 98
 - 2. 84
 - 3. 91
 - 4. 78

Question ID : 12356816
Status : Answered
Chosen Option : 2

Q.22 How many rectangles are there in the given figure?

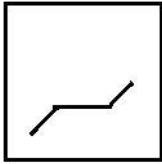


- Ans
- 1. 34
 - 2. 32
 - 3. 30
 - 4. 33

Question ID : 12356820
Status : Not Answered
Chosen Option : --

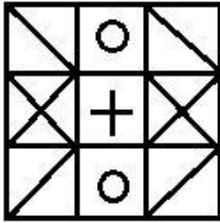
www.exammix.com

Q.23 Select the option figure in which the given figure is embedded (rotation is NOT allowed).




Ans

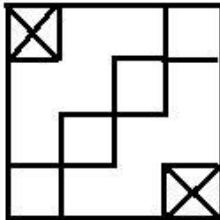
✓ 1.




✗ 2.



✗ 3.



✗ 4.



Question ID : 12356822

Status : Answered

Chosen Option : 1

Q.24 In the following equations, if '+' is interchanged with '-' and '6' is interchanged with '7', then which equation would be correct?

Ans

✓ 1. $67 - 76 + 43 = 100$

✗ 2. $76 - 75 + 77 = 56$

✗ 3. $62 - 67 + 76 = 83$

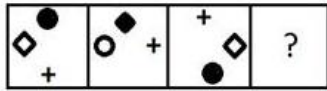
✗ 4. $78 - 68 + 66 = 59$

Question ID : 12356817

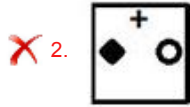
Status : Not Answered

Chosen Option : --

Q.25 Select the figure that can replace the question mark (?) in the following series.



Ans



Question ID : 12356819
Status : Not Answered
Chosen Option : --

www.exammix.com